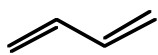
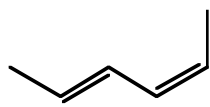
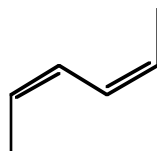
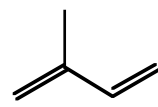


1. Rank the following dienes according to their reactivity (fastest to slowest) in a Diels-Alder reaction. Explain your ranking using pictures *and* words.

**A****B****C****D**